



# Sports Math


How many of each picture do you see? Add them up and write the number in the box!

5

3




+




=

5

5



+




=

6

3



+



=